

2021

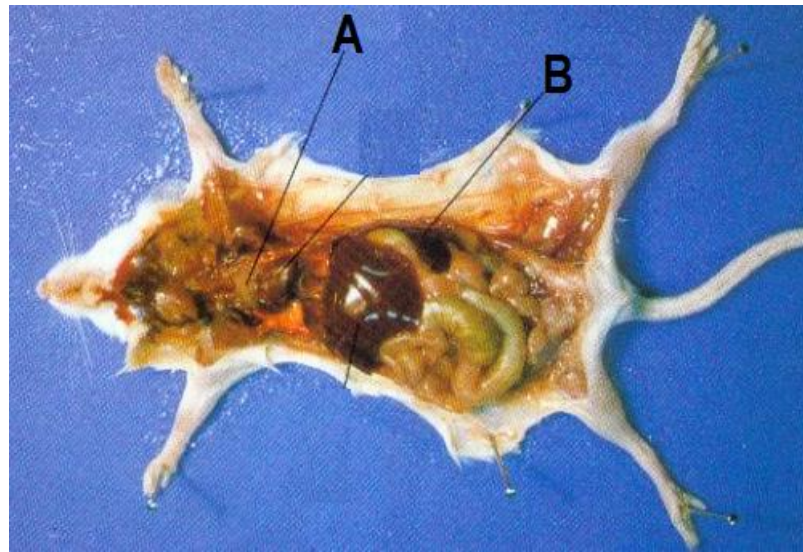
ZOOLOGY HONOURS- PRACTICAL EXAMINATION

Paper: CC4-10-P

Full Marks: 30

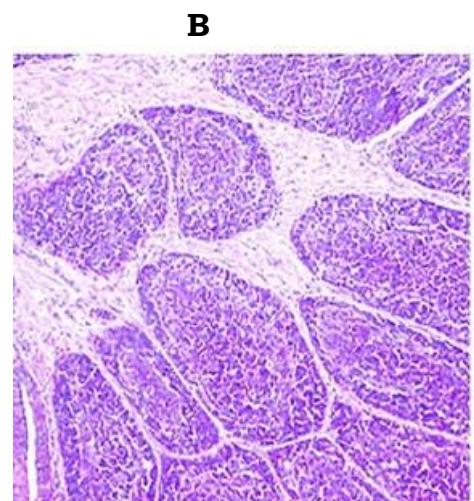
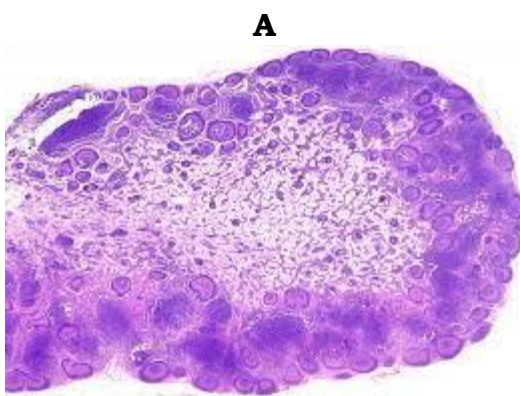
The figures in the margin indicate the full marks.

1. Identify the labelled lymphoid organs **A**, **B** and write at least 3 characters about each one. [1+3] x 2=8



2. Identify the sections of lymphoid organs with reasons:

[1+4] x 2=10



3. Write the principle and procedure of sandwich ELISA. Add a note on its clinical uses. 5+5+2=12